

Please work the problems in the white space provided and clearly box your solutions.

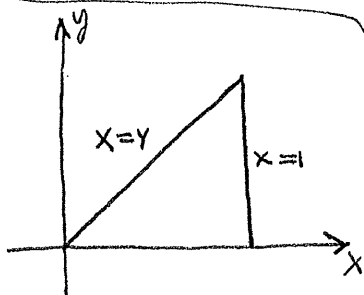
Problem 1 (15pts) Calculate the integral below:

$$\begin{aligned}
 \int_0^1 \int_1^x \int_{e^y}^{x+y} 2z \, dz \, dy \, dx &= \int_0^1 \int_1^x [(x+y)^2 - (e^y)^2] \, dy \, dx \\
 &= \int_0^1 \int_1^x (x^2 + 2xy + y^2 - e^{2y}) \, dy \, dx \\
 &= \int_0^1 \left[x^2(x-1) + x[x^2-1] + \frac{1}{3}(x^3-1) - \frac{1}{2}(e^{2x}-e^2) \right] dx \\
 &= \int_0^1 \left[\left(2 + \frac{1}{3}\right)x^3 - x^2 - x - \frac{1}{3} + \frac{e^2}{2} - \frac{1}{2}e^{2x} \right] dx \\
 &= \frac{7}{3} \frac{1}{4} - \frac{1}{3} - \frac{1}{2} - \frac{1}{3} + \frac{e^2}{2} - \frac{1}{4}(e^2 - 1) \\
 &= \boxed{\frac{e^2}{4} - \frac{1}{3}}
 \end{aligned}$$

Problem 2 (15pts) Calculate $\frac{\partial(x,y,z)}{\partial(\alpha,\beta,\gamma)}$ given that $x = e^{\alpha+\beta}$ and $y = e^{\beta-\alpha}$ and $z = \sin^2(\gamma^2)$. Simplify your answer.

$$\begin{aligned}
 \frac{\partial(x,y,z)}{\partial(\alpha,\beta,\gamma)} &= \det \begin{bmatrix} x_\alpha & x_\beta & x_\gamma \\ y_\alpha & y_\beta & y_\gamma \\ z_\alpha & z_\beta & z_\gamma \end{bmatrix} = \det \begin{bmatrix} e^{\alpha+\beta} & e^{\alpha+\beta} & 0 \\ -e^{\beta-\alpha} & e^{\beta-\alpha} & 0 \\ 0 & 0 & 2\gamma \sin(\gamma^2) \cos(\gamma^2) \end{bmatrix} \\
 &= (e^{\alpha+\beta} e^{\beta-\alpha} + e^{\alpha+\beta} e^{\beta-\alpha}) (4\gamma \sin(\gamma^2) \cos(\gamma^2)) \\
 &= \boxed{4e^{2\beta} \gamma \sin(2\gamma^2)}
 \end{aligned}$$

Problem 3 (15pts) Calculate $\int_0^1 \int_y^1 e^{x^2} \, dx \, dy = \int_0^1 \int_0^x e^{x^2} \, dy \, dx$



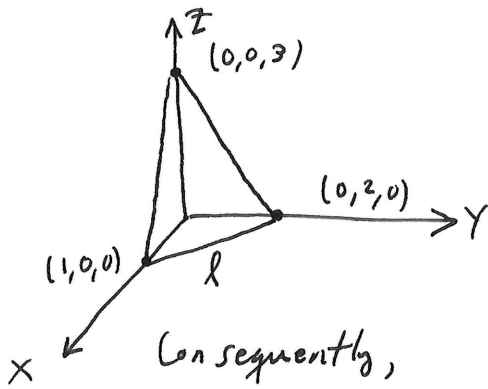
$0 \leq y \leq 1$
 $y \leq x \leq 1$
 TYPE II \longrightarrow TYPE I

aka $0 \leq x \leq 1$
 $0 \leq y \leq x$

$$\begin{aligned}
 &= \int_0^1 \int_0^x e^{x^2} \, dy \, dx \\
 &= \int_0^1 x e^{x^2} \, dx \\
 &= \frac{1}{2} e^{x^2} \Big|_0^1 \\
 &= \boxed{\frac{1}{2}(e-1)}
 \end{aligned}$$

$$z = 3 - 3x - \frac{3}{2}y$$

Problem 4 (15pts) Find the volume bounded by $x + y/2 + z/3 = 1$ and $x \geq 0, y \geq 0$ and $z \geq 0$.



$$x = y = 0 \Rightarrow z/3 = 1 \therefore (0, 0, 3) \text{ on } z\text{-axis.}$$

$$x = z = 0 \Rightarrow y/2 = 1 \therefore (0, 2, 0) \text{ on } y\text{-axis}$$

$$y = z = 0 \Rightarrow x = 1 \therefore (1, 0, 0) \text{ on } x\text{-axis.}$$

These points help me draw \mathcal{P}

$$z = 0 \Rightarrow x + y/2 = 1 \iff \underline{y = 2 - 2x} : l \text{ for } 0 \leq x \leq 1$$

$$V = \int_0^1 \int_0^{2-2x} \int_0^{3-3x-\frac{3}{2}y} dz \, dy \, dx = \int_0^1 \int_0^{2-2x} (3 - 3x - \frac{3}{2}y) \, dy \, dx$$

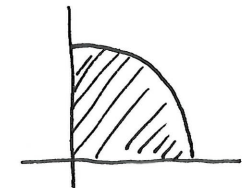
$$= \int_0^1 \left[(3 - 3x)(2 - 2x) - \frac{3}{4}(2 - 2x)^2 \right] dx$$

$$= \int_0^1 \left(6 - 12x + 6x^2 - \frac{3}{4}(4 - 8x + 4x^2) \right) dx = 6 - 6 + \frac{6}{3} - \frac{3}{4} \left[4 - 4 + \frac{4}{3} \right]$$

$$= 2 - 1$$

$$= \boxed{1}$$

Problem 5 (15pts) Let $f(x, y) = xy$ and let D be the quarter disk of radius R in the quadrant where $x \geq 0$ and $y \geq 0$. Calculate $\iint_D f \, dA$. $xy = (r \cos \theta)(r \sin \theta)$, $dA = r \, dr \, d\theta$



$$0 \leq \theta \leq \pi/2$$

$$0 \leq r \leq R$$

$$\iint_D f \, dA = \int_0^{\pi/2} \int_0^R r^3 \sin \theta \cos \theta \, dr \, d\theta$$

$$= \left(\frac{R^4}{4} \right) \int_0^{\pi/2} \frac{1}{2} \sin(2\theta) \, d\theta$$

$$= \left(\frac{R^4}{4} \right) \left(\frac{-1}{4} \cos(2\theta) \Big|_0^{\pi/2} \right)$$

$$= \frac{R^4}{4} \left(-\frac{1}{4} \cos(\pi) + \frac{1}{4} \cos(0) \right)$$

$$= \boxed{\frac{R^4}{8}}$$

$$x^2 + y^2 = r^2 = \rho^2 \sin^2 \phi, \quad dV = \rho^2 \sin \phi \, d\rho \, d\phi \, d\theta$$

Problem 6 (15pts) Calculate the integral below by changing to spherical coordinates:

$$I = \int_{-2}^2 \int_0^{\sqrt{4-x^2}} \int_0^{\sqrt{4-x^2-y^2}} (x^2 + y^2) \, dz \, dy \, dx$$

$$I = \int_0^2 \int_0^{\pi} \int_0^{\pi/2} \rho^4 \sin^3 \phi \, d\phi \, d\theta \, d\rho$$

$$= \left(\frac{\rho^5}{5} \Big|_0^2 \right) \left(\theta \Big|_0^{\pi} \right) \int_0^{\pi/2} (1 - \cos^2 \phi) \sin \phi \, d\phi$$

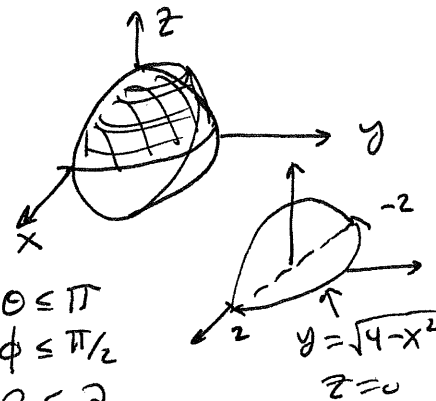
$$= \frac{32\pi}{5} \int_1^{-1} (1 - u^2) (-du) \quad \left\{ \begin{array}{l} u = \cos \phi \\ du = -\sin \phi \, d\phi \\ u(0) = 1, u(\pi) = -1 \end{array} \right.$$

$$= \frac{32\pi}{5} \left(\frac{u^3}{3} - u \right) \Big|_1^{-1} = \frac{32\pi}{5} \left(-\frac{1}{3} + 1 - \frac{1}{3} + 1 \right) = \boxed{\frac{128\pi}{5}}$$

$$-2 \leq x \leq 2$$

$$0 \leq y \leq \sqrt{4-x^2}$$

$$0 \leq z \leq \sqrt{4-x^2-y^2}$$

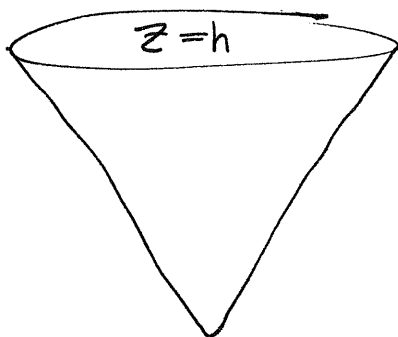


$$0 \leq \theta \leq \pi$$

$$0 \leq \phi \leq \pi/2$$

$$0 \leq \rho \leq 2$$

Problem 7 (10pts) Find the volume of the solid bounded by $x^2 + y^2 = 3z^2$ and $z = h$ where $h > 0$.



$$r^2 = 3z^2$$

$$r = z\sqrt{3}$$

$$0 \leq \theta \leq 2\pi$$

$$0 \leq r \leq z\sqrt{3}$$

$$0 \leq z \leq h$$

$$V = \int_0^{2\pi} \int_0^h \int_0^{z\sqrt{3}} r \, dr \, dz \, d\theta$$

$$= \left(\int_0^{2\pi} d\theta \right) \left(\int_0^h \frac{1}{2} (z\sqrt{3})^2 \, dz \right)$$

$$= (2\pi) \left(\frac{3}{2} \frac{z^3}{3} \Big|_0^h \right)$$

$$= \boxed{\pi h^3}$$

$$0 \leq \rho \leq R, \quad 0 \leq \theta \leq 2\pi, \quad 0 \leq \phi \leq \pi/2$$

Problem 8 (10pts) Let B be the hemisphere formed by $x^2 + y^2 + z^2 \leq R^2$ and $z \geq 0$. If the mass density $\delta = \frac{dm}{dV} = k\rho^2$ and B has a total mass of M then find the moment of inertia for B about the z -axis (recall we said $I = \iiint_B (x^2 + y^2) dm$). Do not use k in your answer, instead present the result in terms of M and R .

$$dV = \rho^2 \sin \phi \, d\rho \, d\phi \, d\theta$$

$$dm = k\rho^2 dV$$

$$M = \iiint_B dm = \int_0^{2\pi} \int_0^{\pi/2} \int_0^R k \rho^4 \sin \phi \, d\rho \, d\phi \, d\theta$$

$$= k \left(\frac{R^5}{5} \right) (2\pi) (-\cos \phi) \Big|_0^{\pi/2}$$

$$= \frac{2\pi k R^5}{5} \quad \therefore k = \frac{5M}{2\pi R^5}$$

$$I = \iiint_B (x^2 + y^2) dm$$

$$= \int_0^R \int_0^{2\pi} \int_0^{\pi/2} (\rho^2 \sin^2 \phi) (k\rho^2) (\rho^2 \sin \phi \, d\phi \, d\theta \, d\rho)$$

$$= \left(\int_0^R \rho^6 \, d\rho \right) \left(\int_0^{2\pi} d\theta \right) \left(\int_0^{\pi/2} k \sin^3 \phi \, d\phi \right)$$

$$= \left(\frac{R^7}{7} \right) (2\pi) \left(\frac{4k}{3} \right) \quad \text{as } \left(\int_0^{\pi/2} \sin^3 \phi \, d\phi = \int_{-1}^1 (u^2 - 1) \, du = \frac{4}{3} \right)$$

(See PROBLEM 6 OR CALCULUS II)

$$= \left(\frac{8\pi R^7}{21} \right) (k)$$

$$= \left(\frac{8\pi R^7}{21} \right) \left(\frac{5M}{2\pi R^5} \right)$$

$$= \boxed{\frac{20}{21} MR^2}$$